


Write the name of the shape made by each net.

1. cube

1



2



3



4



5




6



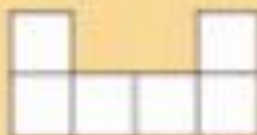
### Explore

Which of these nets cannot be folded to make a cube?

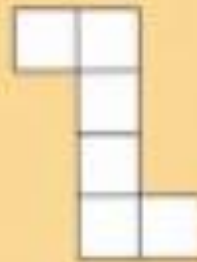
7




8



9



10



11



Check by copying them onto squared paper, cutting them out and folding.